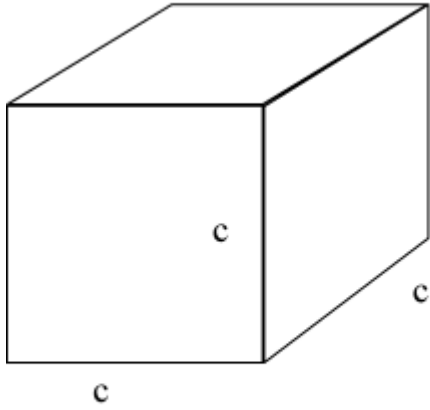


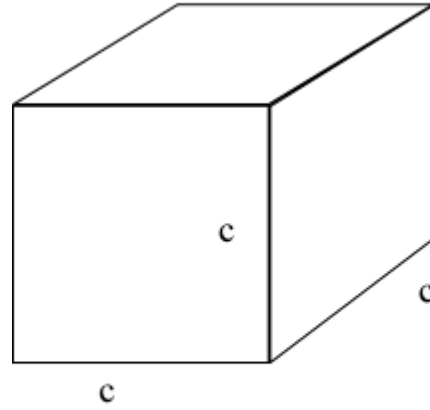
Calculate Volume and Surface Area

What is the missing length?

 $c =$

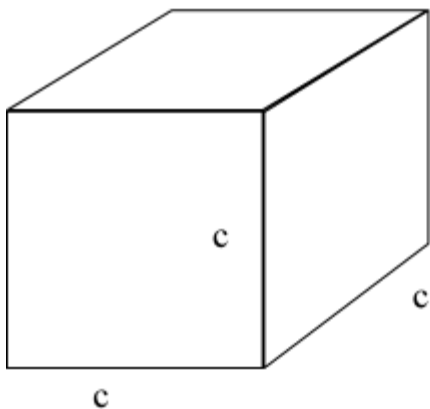
Volume = 125 cubic centimeters

What is the missing length?

 $c =$

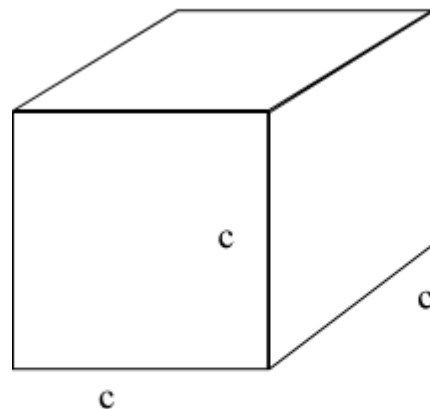
Volume = 8 cubic centimeters

What is the missing length?

 $c =$

Volume = 27 cubic centimeters

What is the missing length?

 $c =$

Surface Area = 112 square centimeters