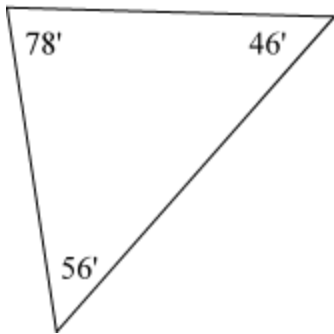


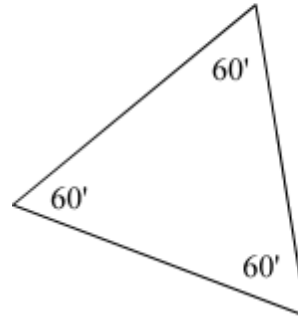
### Identify the different types of triangles.

What kind of triangle is this?



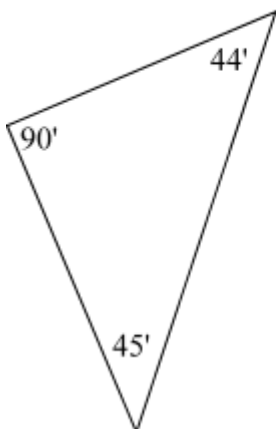
- Right
- Acute
- Obtuse
- Scalene
- Isosceles
- Equilateral

What kind of triangle is this?



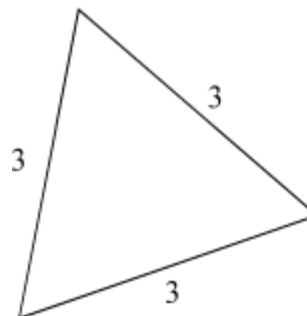
- Right
- Acute
- Obtuse
- Scalene
- Isosceles
- Equilateral

What kind of triangle is this?



- Right
- Acute
- Obtuse
- Scalene
- Isosceles
- Equilateral

What kind of triangle is this?



- Right
- Acute
- Obtuse
- Scalene
- Isosceles
- Equilateral