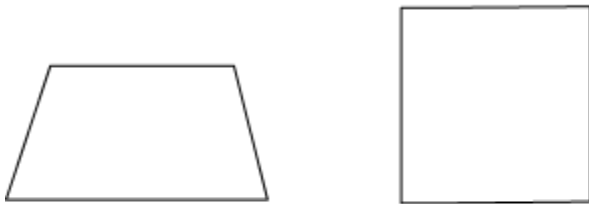


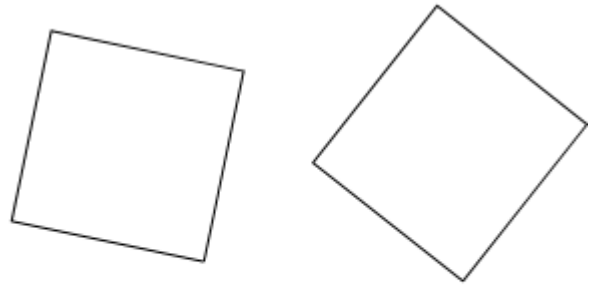
## Similar and Congruent

How are these shapes related?



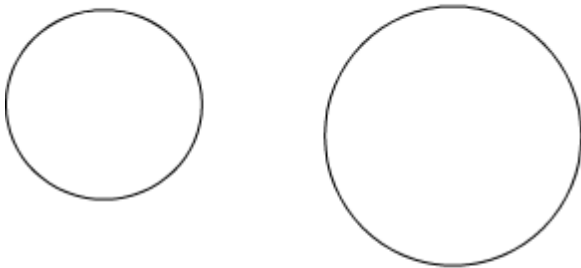
- Similar but not congruent
- Congruent
- Neither similar nor congruent

How are these shapes related?



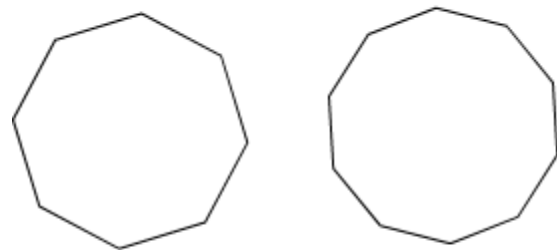
- Similar but not congruent
- Congruent
- Neither similar nor congruent

How are these shapes related?



- Similar but not congruent
- Congruent
- Neither similar nor congruent

How are these shapes related?



- Similar but not congruent
- Congruent
- Neither similar nor congruent