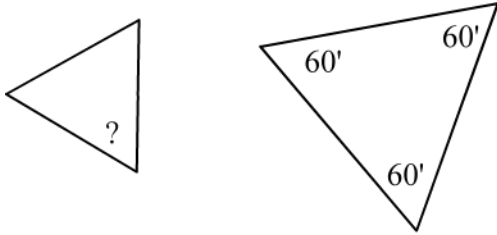
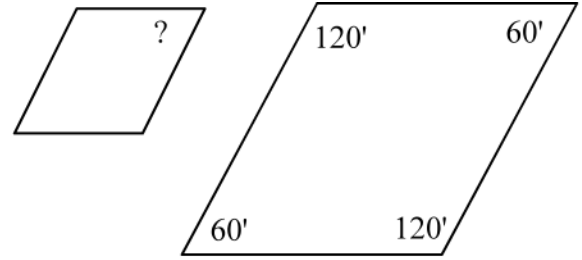


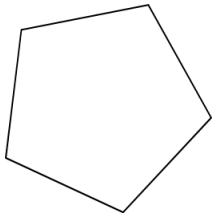
### Similar and Congruent Shapes



If these two shapes are similar, what is the measure of the unknown angle?



If these two shapes are similar, what is the measure of the unknown angle?

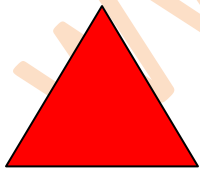


Draw a shape similar to this one:

Draw the shape that is congruent to the shape described below.

I am a quadrilateral with 4 right angles. Two of my sides are 2cm and two of my sides are 4cm


Look at this shape



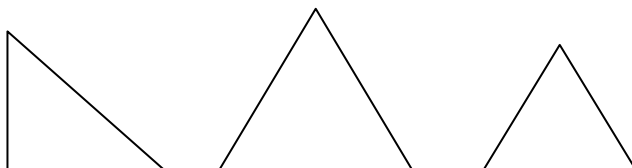
Look at this shape:



Is this shape...



Which of these shapes are congruent?



Similar?

Congruent?

Neither similar nor congruent.?