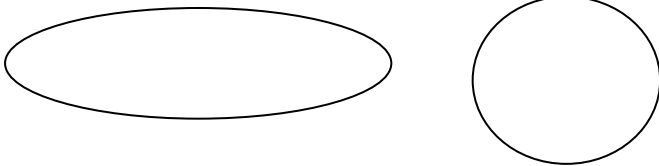


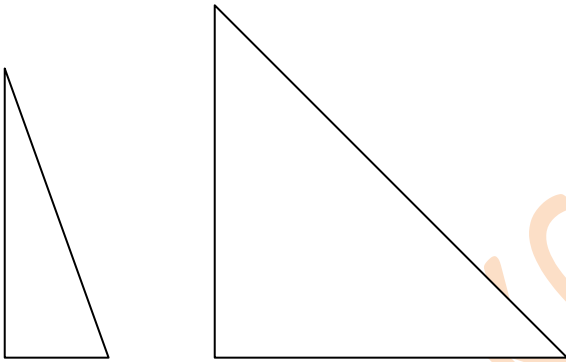
### Similar and Congruent

How are these figures related?




- Similar
- Similar but not congruent
- Neither similar nor congruent

How are these figures related?



- Similar
- Similar but not congruent
- Neither similar nor congruent

How are these figures related?



- Similar
- Similar but not congruent
- Neither similar nor congruent

[www.K6Math.com](http://www.K6Math.com)