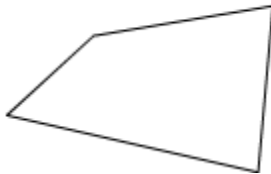


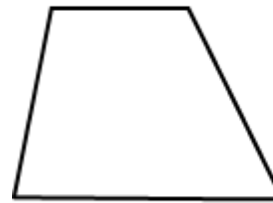
Classify Quadrilaterals

Is this shape a Parallelogram?

Yes
No



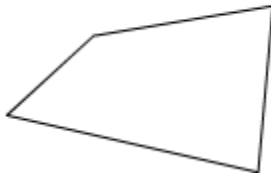
Choose all words that describe this shape.



Trapezoid
Quadrilateral
Rectangle
Parallelogram
Polygon

Is this shape a Quadrilateral?

Yes
No



Choose the word to complete this sentence.

A Square is

a Quadrilateral.

always
sometimes
never



Choose the word to complete this sentence.

A Quadrilateral is

a Rectangle.

always
sometimes
never

What is the name of these shapes?



Is this shape a Quadrilateral?

Yes
No

