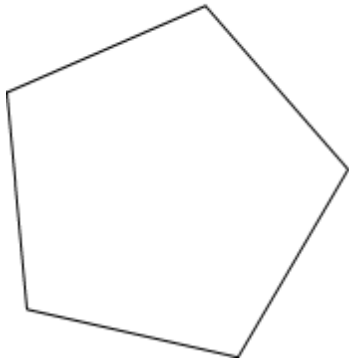


### Review of 2D and 3D figures

This is a Polygon. Is it regular or irregular?



Regular   
Irregular

Is this a Polygon?



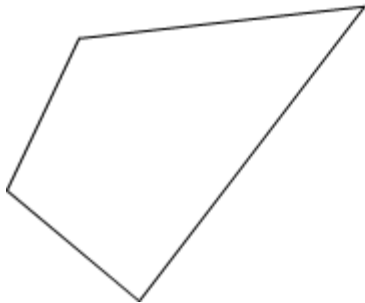
Yes   
No

Is this a Polygon?



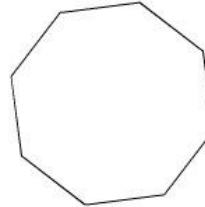
Yes   
No

Is this a Quadrilateral?

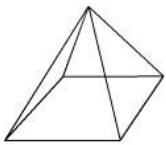


Yes   
No

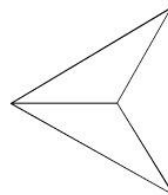
What is name of this figure?



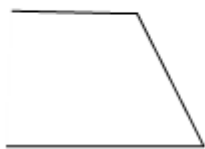
What is this?



This is a platonic solid. What is its name?



Is this a Polygon?



Yes   
No