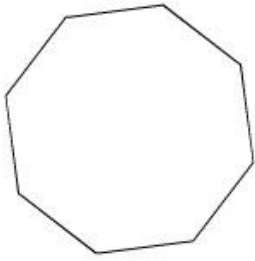


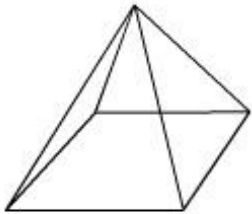
**Fill in the blanks with a value, including '0' where appropriate.**



How many ....

Sides	<input type="text"/>
Edges	<input type="text"/>
Faces	<input type="text"/>
Vertices	<input type="text"/>

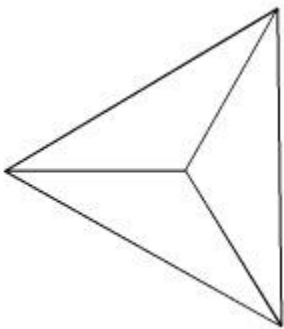
... does this illustration show?



How many ....

Sides	<input type="text"/>
Edges	<input type="text"/>
Faces	<input type="text"/>
Vertices	<input type="text"/>

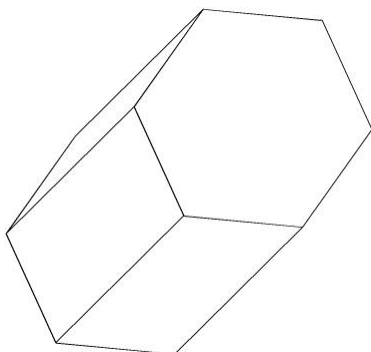
... does this illustration show?



How many ....

Sides	<input type="text"/>
Edges	<input type="text"/>
Faces	<input type="text"/>
Vertices	<input type="text"/>

... does this illustration show?



How many ....

Sides	<input type="text"/>
Edges	<input type="text"/>
Faces	<input type="text"/>
Vertices	<input type="text"/>

... does this illustration show?