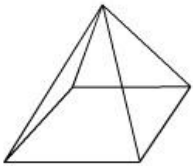
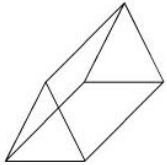
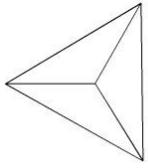
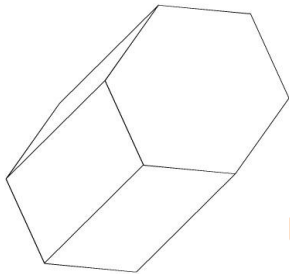


Which of these is a triangular prism?



Which figure is this?



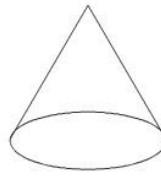
Rectangular Prism

Cone

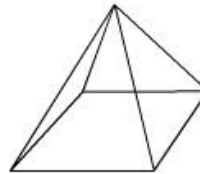
Cylinder

Hexagonal Prism

Write the name of this figure.



Write the name of this figure.



Write the name of this figure.

