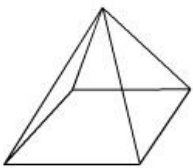
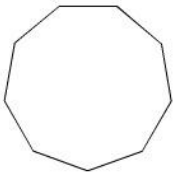
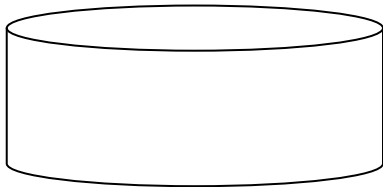


Which of these are 2D Shapes?



Which figure is this?



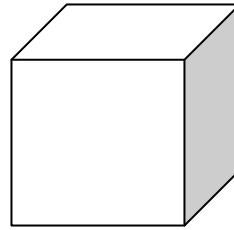
Cube

Cone

Cylinder

Cuboid

Write the name of this figure.



Write the name of this figure.

