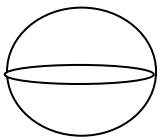


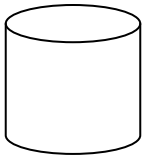


Which of these is a sphere?



What figure is this?



Rectangular Prism



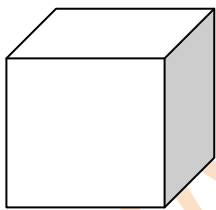
Cylinder



Cone



What figure is this?



Cube



Sphere



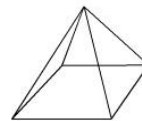
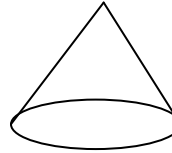

Pyramid



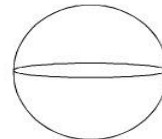
Cylinder



Which of these is a pyramid?



What figure is this?



Cube



Pyramid



Sphere



Cylinder



Which of these is a rectangular Prism?

