

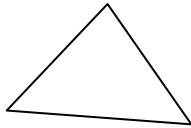




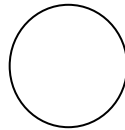

Select all the Rectangles



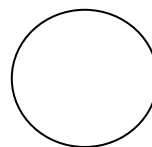
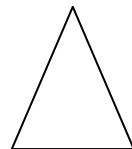
Select all the Squares



Select all the Triangles



Which of these is a Circle?



www.K6Math.com