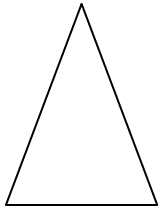


What Shape is this?




- Circle
- Square
- Triangle
- Rectangle


Which of these is a Triangle?



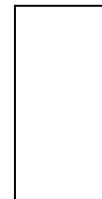
What Shape is this?



- Circle
- Square
- Triangle
- Rectangle




What Shape is this?

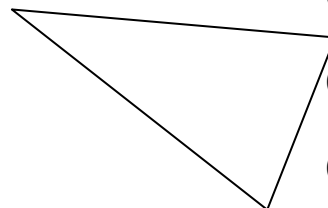


- Circle
- Square
- Triangle
- Rectangle

Which of these is a Triangle?



What Shape is this?



- Circle
- Square
- Triangle
- Rectangle