
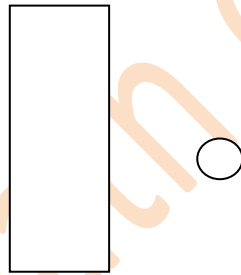
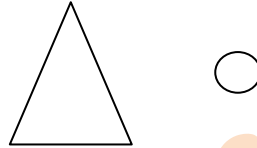
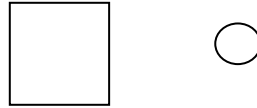


What Shape is this?




- Circle
- Square
- Triangle

Which of these is a Triangle?



What Shape is this?



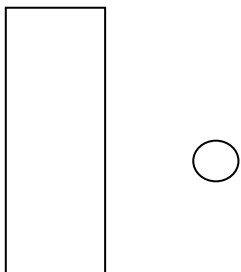


- Circle
- Square
- Triangle
- Rectangle

What Shape is this?




- Circle
- Square
- Triangle
- Rectangle

Which of these is a Rectangle?



What Shape is this?



- Circle
- Square
- Triangle
- Rectangle