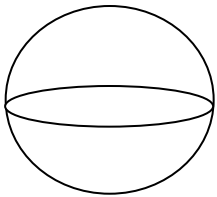
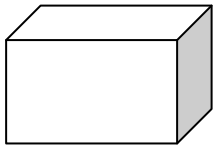
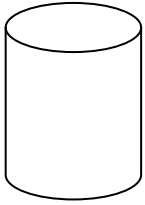
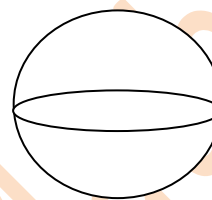
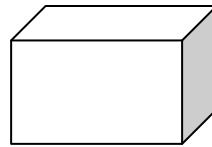
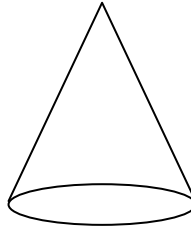


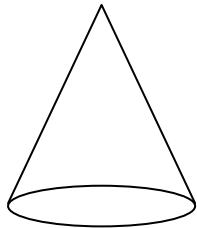
Which of these is a Sphere?



Which of these is a Rectangular Prism?



What Figure is this?

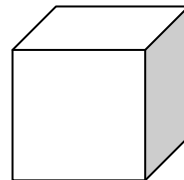


Sphere

Cylinder

Cone

What Figure is this?



Sphere

Cube

Rectangular Prism

What Figure is this?

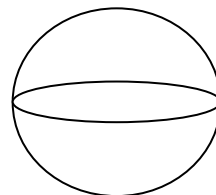


Cone

Cylinder

Rectangular Prism

What Figure is this?



Sphere

Cylinder

Cone

Cube