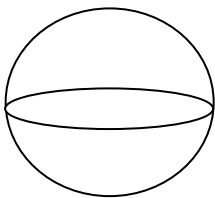
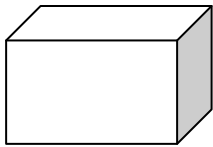
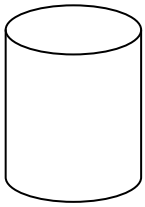
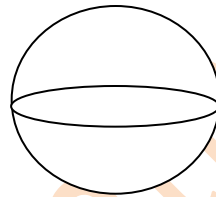
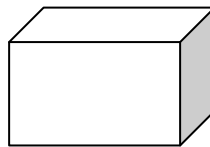
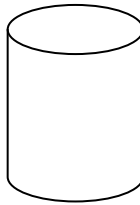


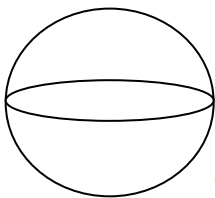
Which of these is a Rectangular Prism?



Which of these is a Cylinder?



What Figure is this?

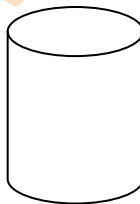


Sphere

Cylinder

Rectangular Prism

What Figure is this?

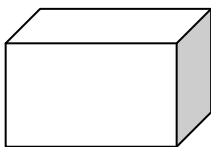


Sphere

Cylinder

Rectangular Prism

What Figure is this?

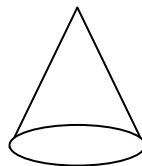


Sphere

Cylinder

Rectangular Prism

What Figure is this?



Sphere

Cylinder

Cone

Cube