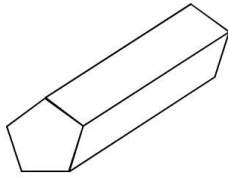
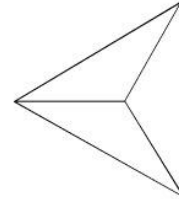


Count sides, vertices, faces and edges.

How many edges does this shape have?

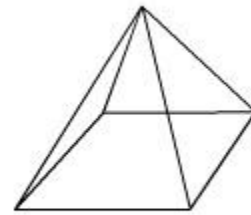
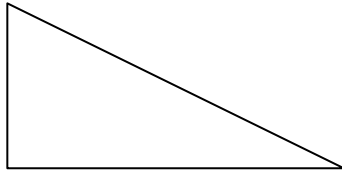


How many faces does this shape have?




How many edges does this shape have?

How many vertices does this shape have?



How many faces does this shape have?



How many vertices does this shape have?

