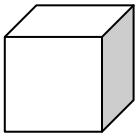

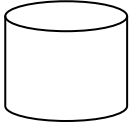
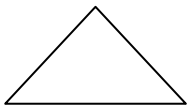
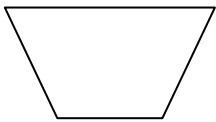



Which of these is a cube?



Which of these is a triangle?



What figure is this?



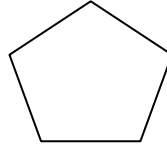
Rhombus

Heptagon

Rectangle

Decagon

What figure is this?



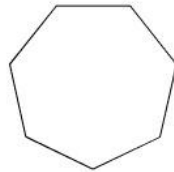
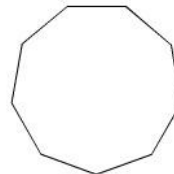
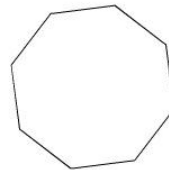
Nonagon

Pentagon

Polygon

Hexagon

Which of these is a nonagon?



What figure is this?

