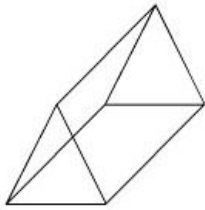
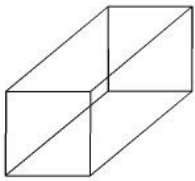
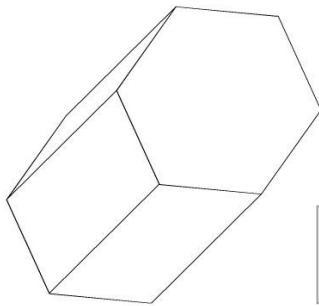


Which shape has fewer vertices?



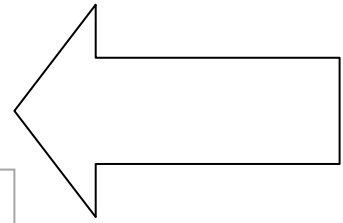
How many vertices does this shape have?



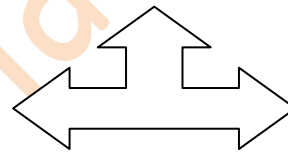
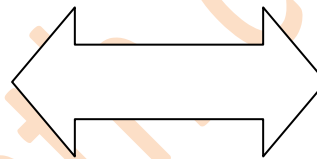
How many vertices does this shape have?



How many sides does this shape have?



Which shape has more sides?



How many sides does this shape have?

