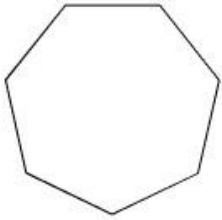
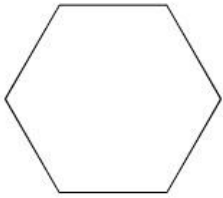
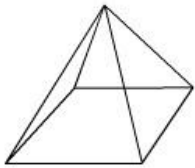


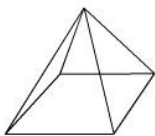
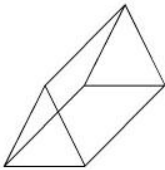
Which shape has fewer vertices?



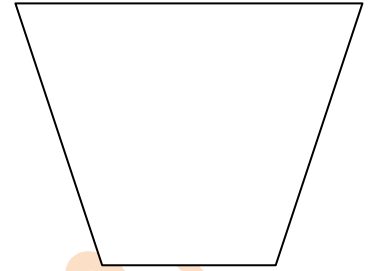
How many vertices does this shape have?



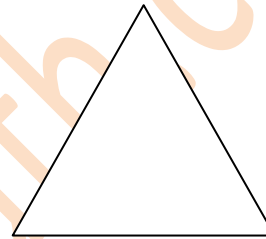
Which figure has fewer vertices?



How many sides does this shape have?



Which shape has more sides?



How many sides does this shape have?

