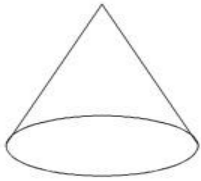
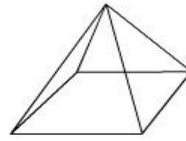


**What figure is this?**



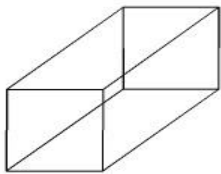
- Heptagon
- Rectangular Prism
- Cone
- Circle

**What figure is this?**



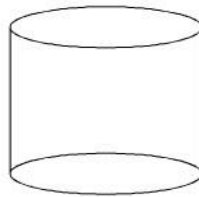
- Triangular Prism
- Rectangular Prism
- Pyramid
- Cone

**What figure is this?**



- Cube
- Rectangular Prism
- Sphere
- Pentagon

**What figure is this?**



- Triangular Prism
- Rhombus
- Cylinder
- Cone