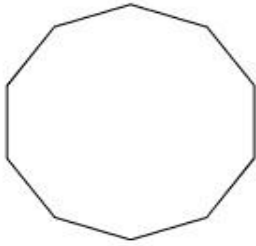


Look at this shape.




How many edges does it have?

How many vertices does it have?

What is its name?

Look at this shape.

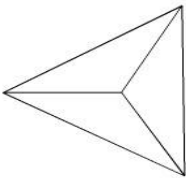


How many edges does it have?

How many vertices does it have?

What is its name?

Look at this figure.



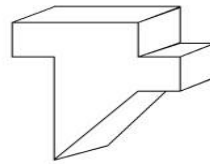
How many faces does it have?

How many edges does it have?

How many vertices does it have?

What is its name?

Look at this figure.



How many faces does it have?

How many edges does it have?

How many vertices does it have?

What is its name?
