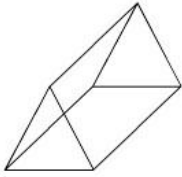
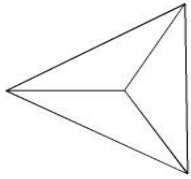


Which figure has more vertices?

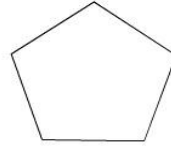
Write the name of each figure.

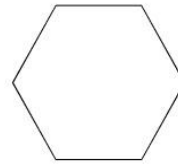




Which shape has more vertices?

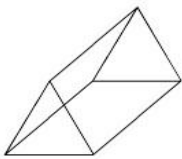
Write the name of each figure.

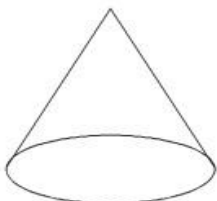




Which figure has less vertices?

Write the name of each figure.





Which figure has more sides?

Write the name of each figure.

