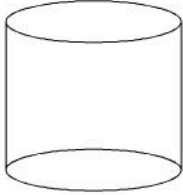


**Which figure has fewer faces?**

**Which shape has more vertices?**

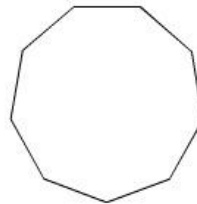
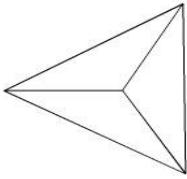
**Write the name of each figure.**

**Write the name of each figure.**



---

---



---

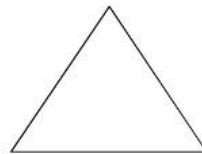
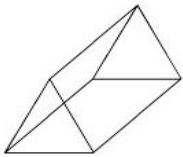
---

**Which figure has more vertices?**

**Which shape has more sides?**

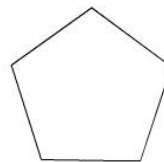
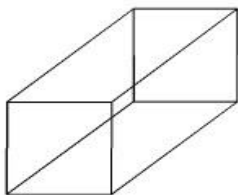
**Write the name of each figure.**

**Write the name of each figure.**



---

---



---

---