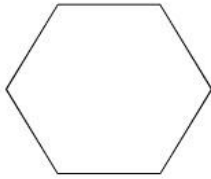
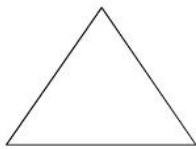


Which shape has fewer vertices?

Write the name of each figure.

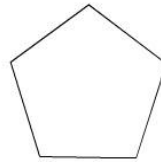




Which shape has more vertices?

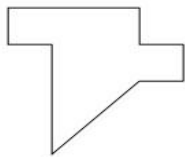
Write the name of each figure.

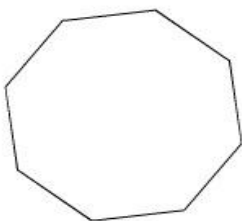




Which shape has more vertices?

Write the name of each figure.





Which figure has more vertices?

Write the name of each figure.

