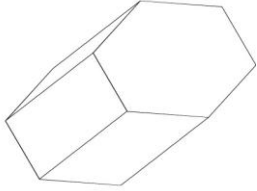
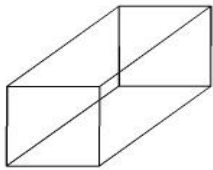


Which figure has fewer faces?

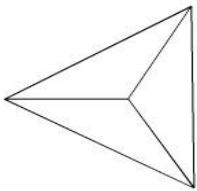
Write the name of each figure.

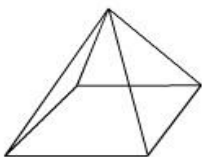




Which figure has more faces?

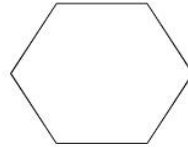
Write the name of each figure.

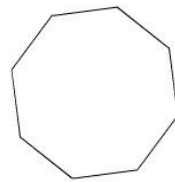




Which shape has fewer vertices?

Write the name of each figure.





Which figure has more faces?

Write the name of each figure.

