

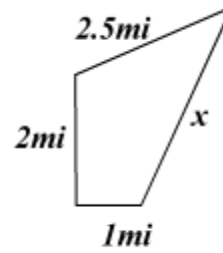
Calculate Perimeter

This square has a perimeter of 12 inches.



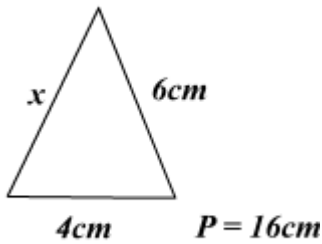
$x =$

Find the value of x



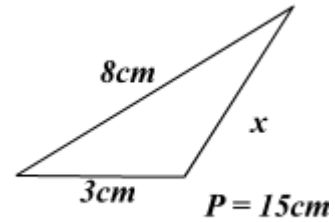
$x =$ $P = 10mi$

Find the value of x



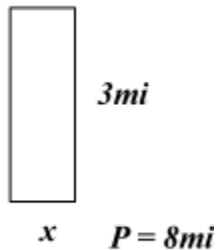
$x =$

Find the value of x



$x =$

Find the value of x



$x =$

This square has a perimeter of 32 meters.



$x =$