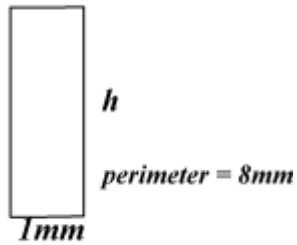


Calculate Perimeter

Find the value of h



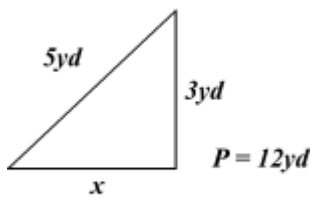
$$h = \boxed{}$$

Find the perimeter of this square.



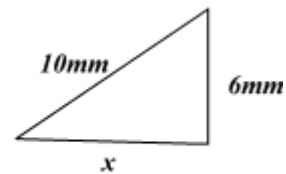
$$P = \boxed{}$$

Find the value of h



$$x = \boxed{}$$

$P = 24\text{mm}$



$$x = \boxed{}$$

Find the value of P



$$P = \boxed{}$$

This square has a perimeter of 20 inches.



$$x = \boxed{}$$