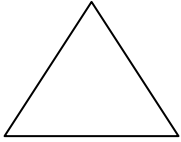


How many sides does this shape have?




Sides

How many sides does this shape have?




Sides

How many sides does this shape have?



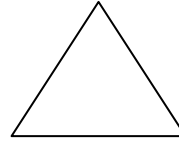
Sides

How many sides does this shape have?



Sides

How many vertices does this shape have?




Vertices

How many vertices does this shape have?



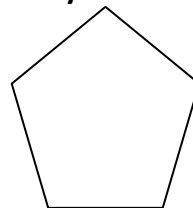
Vertices

How many vertices does this shape have?



Vertices

How many vertices does this shape have?



Vertices