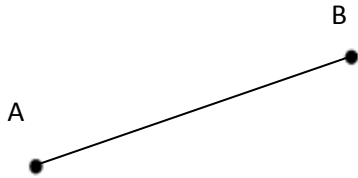


Lines, line segments and rays

Identify the figure

Using the correct symbol, write the name of this figure.



- Line
- Line Segment
- Ray


Name

→

→

Identify the figure

Using the correct symbol, write the name of this figure.



- Line
- Line Segment
- Ray

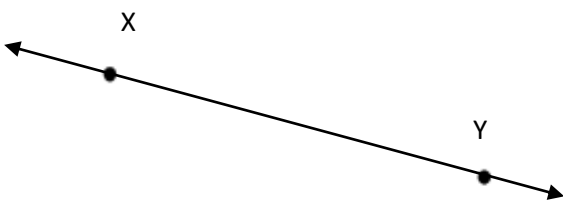
Name

→

→

Identify the figure

Using the correct symbol, write the name of this figure.



- Line
- Line Segment
- Ray

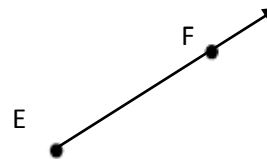
Name

→

→

Identify the figure

Using the correct symbol, write the name of this figure.



- Line
- Line Segment
- Ray

Name

→

→