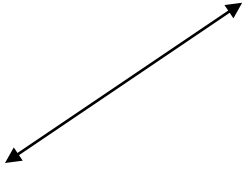


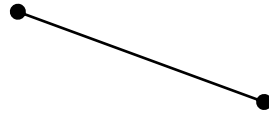
Identify Lines, line segments and rays

What is this?



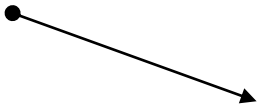
- Line
- Line Segment
- Ray

What is this?




- Line
- Line Segment
- Ray

What is this?




- Line
- Line Segment
- Ray

What is this?



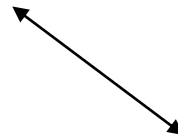
- Line
- Line Segment
- Ray

What is this?



- Line
- Line Segment
- Ray

What is this?



- Line
- Line Segment
- Ray