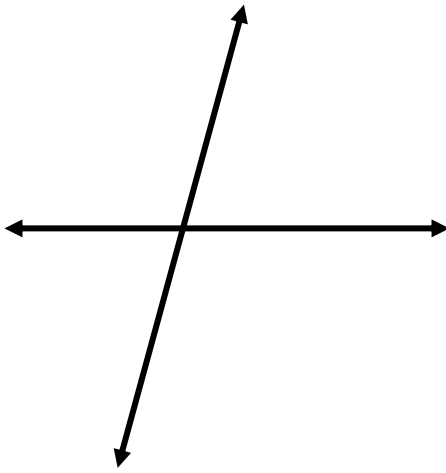
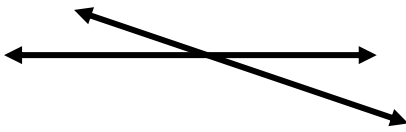


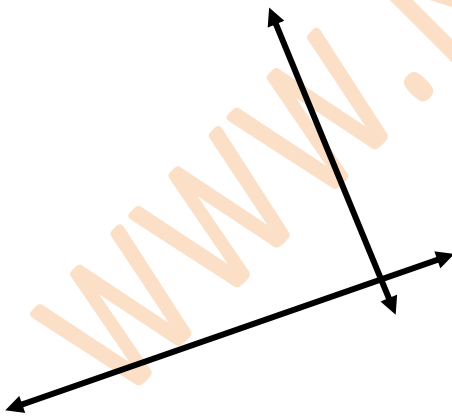
Name the relationship between the lines



- Parallel
- Perpendicular
- Intersecting



- Parallel
- Perpendicular
- Intersecting



- Parallel
- Perpendicular
- Intersecting

www.K6Math.com

www.K6Math.com