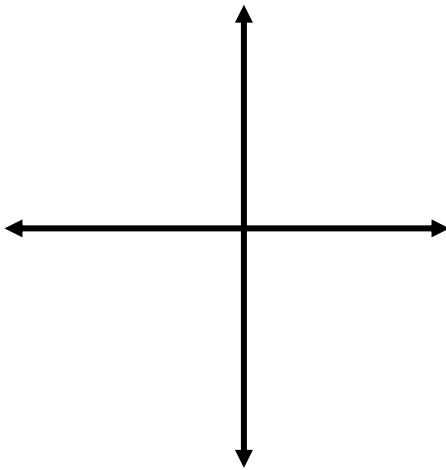



Name the relationship between the lines



Parallel

Perpendicular

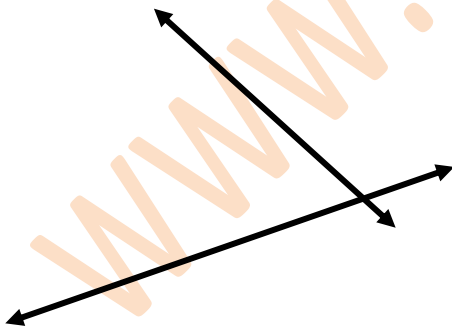
Intersecting



Parallel

Perpendicular

Intersecting



Parallel

Perpendicular

Intersecting

www.K6Math.com

www.K6Math.com