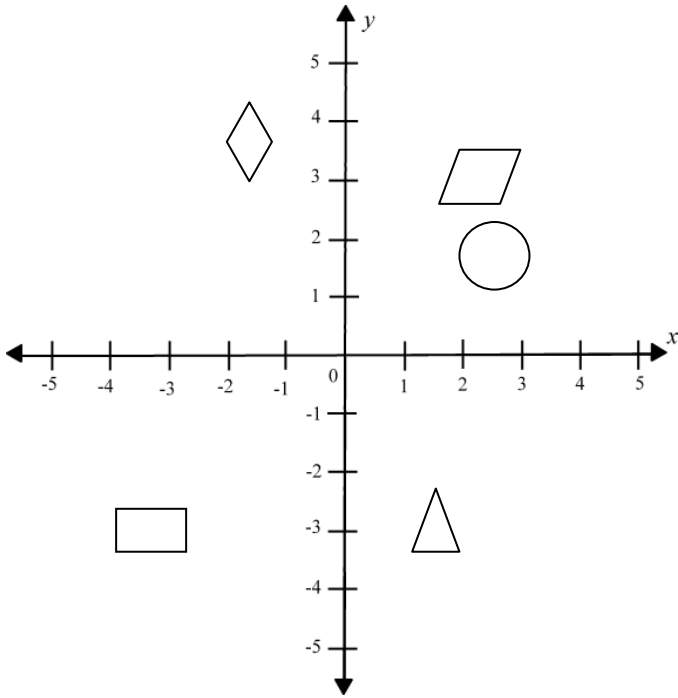




Identify Quadrants by Coordinates




What would the coordinates of this shape  be?


- (x,y)
- (-x,y)
- (-x,-y)
- (x,-y)

What would the coordinates of this shape  be?


- (x,y)
- (-x,y)
- (-x,-y)
- (x,-y)

What would the coordinates of this shape  be?

- (x,y)
- (-x,y)
- (-x,-y)
- (x,-y)

What would the coordinates of this shape  be?

- (x,y)
- (-x,y)
- (-x,-y)
- (x,-y)

What would the coordinates of this shape  be?

- (x,y)
- (-x,y)
- (-x,-y)
- (x,-y)