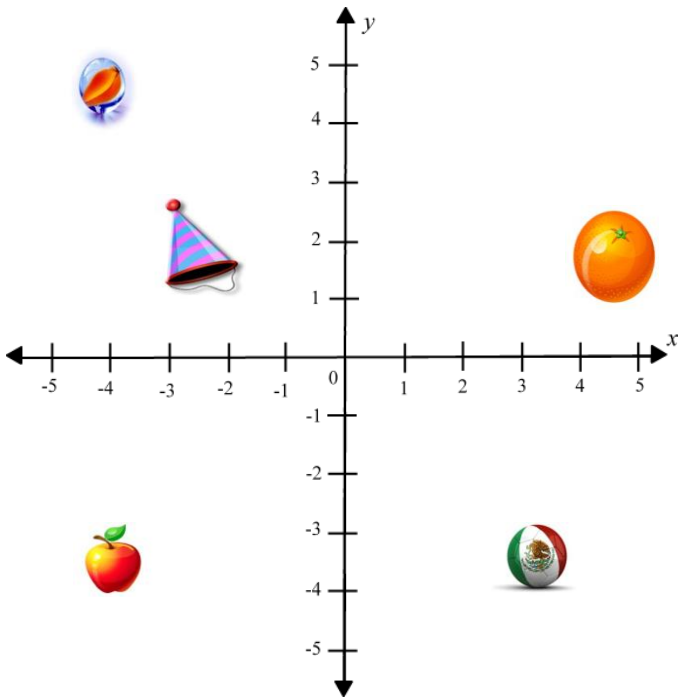



### Identify Quadrants




What would the coordinates of this shape  be?


- (x,y)
- (-x,y)
- (-x,-y)
- (x,-y)

What would the coordinates of this shape  be?

- (x,y)
- (-x,y)
- (-x,-y)
- (x,-y)

What would the coordinates of this shape  be?

- (x,y)
- (-x,y)
- (-x,-y)
- (x,-y)

What would the coordinates of this shape  be?

- (x,y)
- (-x,y)
- (-x,-y)
- (x,-y)

What would the coordinates of this shape  be?

- (x,y)
- (-x,y)
- (-x,-y)
- (x,-y)

[www.K6Math.com](http://www.K6Math.com)