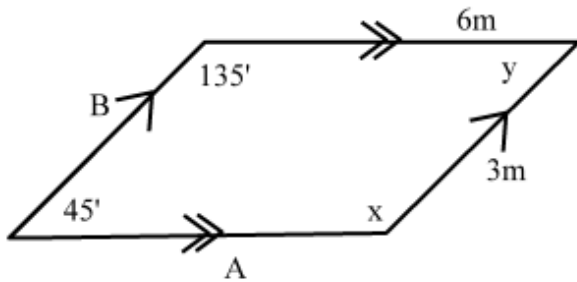


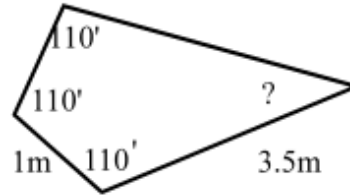
### Calculate missing angles and line lengths

Calculate the measure of the missing angle/s.  
Calculate the measure of the missing length/s.



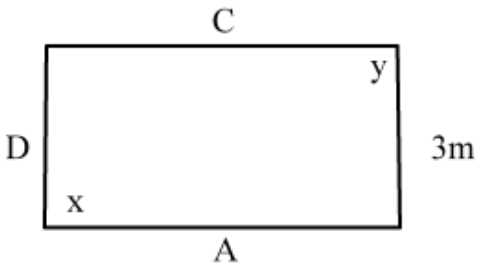
- Missing angle X
- Missing angle Y
- Missing length A
- Missing length B

This shape is a kite.  
Calculate the measure of the missing angle/s.  
Calculate the measure of the missing length/s.



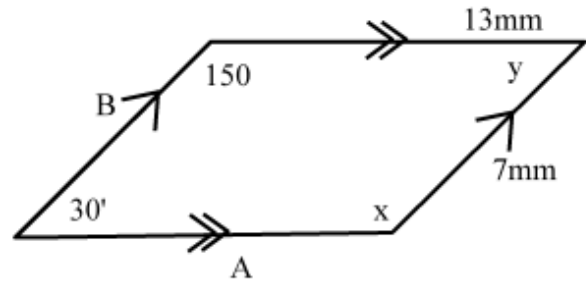
- Missing angle
- Missing length

This shape is a rectangle. It's perimeter is 18m.  
Calculate the measure of the missing angle/s.  
Calculate the measure of the missing length/s.



- Missing angle X
- Missing angle Y
- Missing length A
- Missing length C
- Missing length D

Calculate the measure of the missing angle/s.  
Calculate the measure of the missing length/s.



- Missing angle X
- Missing angle Y
- Missing length A
- Missing length B