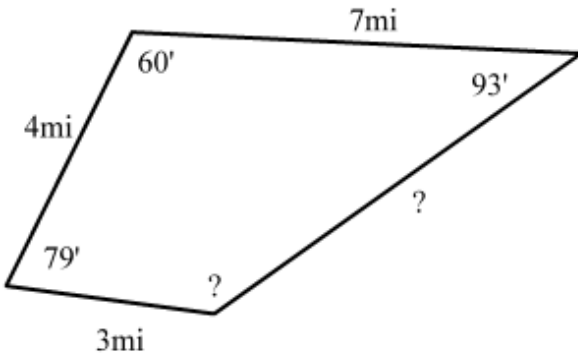


### Calculate missing angles and line lengths

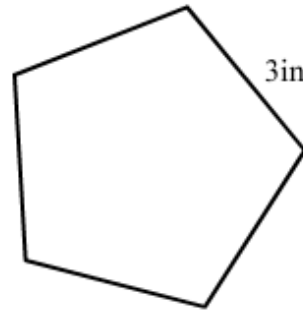
The perimeter of this shape is 20mi  
 Calculate the measure of the missing angle/s.  
 Calculate the measure of the missing length/s.



Missing angle

Missing length

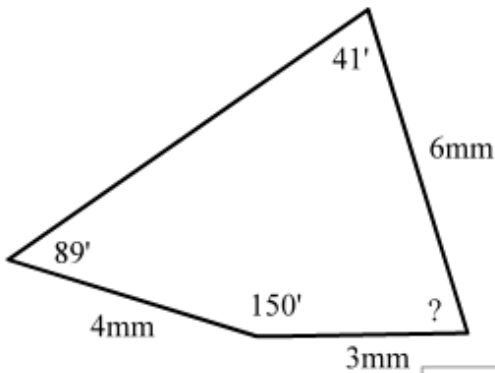
This is a Regular Pentagon  
 Calculate the measure of the missing angle/s.  
 Calculate the measure of the missing length/s.



Missing angle

Missing length

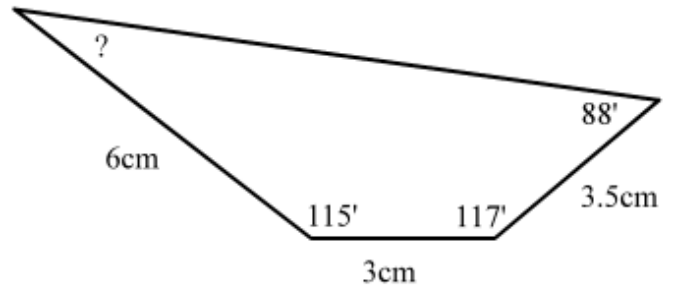
The perimeter of this shape is 20mm  
 Calculate the measure of the missing angle/s.  
 Calculate the measure of the missing length/s.



Missing angle

Missing length

The perimeter of this shape is 22cm  
 Calculate the measure of the missing angle/s.  
 Calculate the measure of the missing length/s.



Missing angle

Missing length