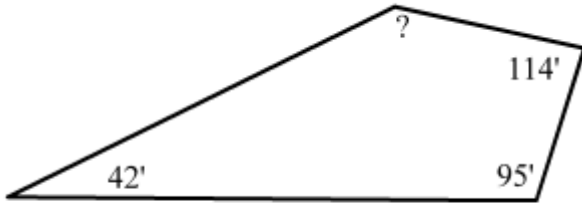


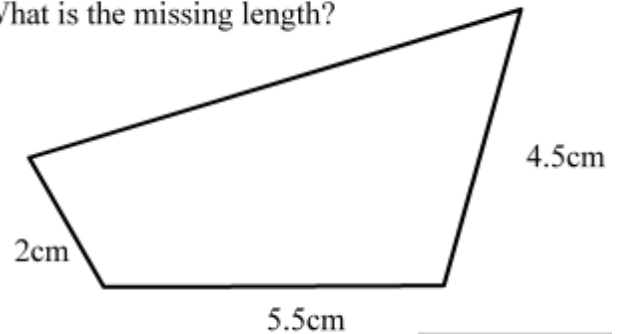
Calculate missing angles and line lengths

What is the measure of the missing angle?

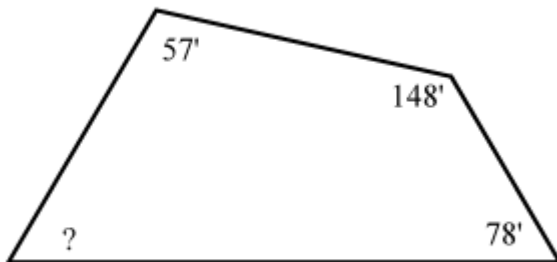


The perimeter of this figure is 20 cm

What is the missing length?

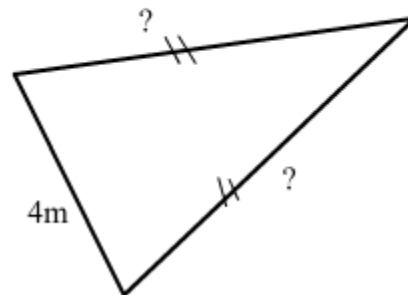


What is the measure of the missing angle?

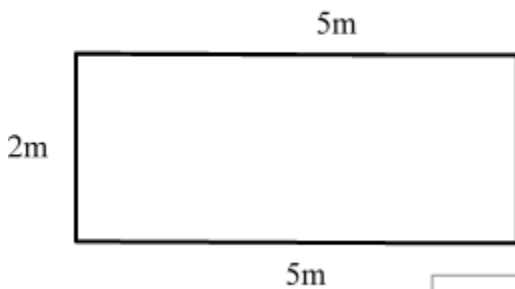


The perimeter of this figure is 20 cm

What are the values of the two missing lengths?



What is the measure of the missing length?



The perimeter of this figure is 18 m

What are the values of the three missing lengths?

