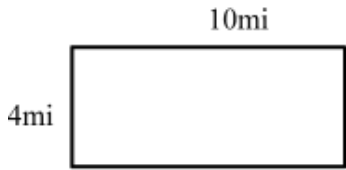



Relationship between Area and Perimeter

The rectangles shown below have the same area.



Rectangle 1



Rectangle 2

What is the perimeter of Rectangle 2?

The rectangles shown below have the same perimeter and the area of rectangle 2 is 10 square feet..



Rectangle 1

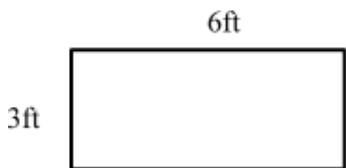


Rectangle 2

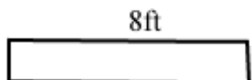
What are the dimensions of rectangle 2?

Length
 Height

The rectangles shown below have the same perimeter



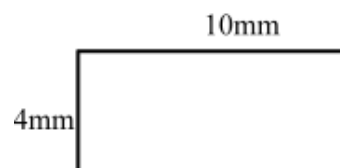
Rectangle 1



Rectangle 2

What is the perimeter of Rectangle 2?

The rectangles shown below have the same area.



Rectangle 1



Rectangle 2

What is the perimeter of rectangle 2?