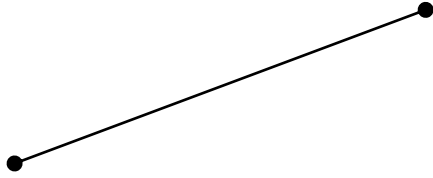



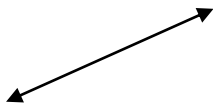
Identify each of the following as either a Line, Line Segment or Ray



- Line
- Line Segment
- Ray



- Line
- Line Segment
- Ray




- Line
- Line Segment
- Ray



- Line
- Line Segment
- Ray



- Line
- Line Segment
- Ray



- Line
- Line Segment
- Ray