


Circle Area, Perimeter and Circumference

In the blank circle provided, fill in the information you are given – then make your calculations to find the answers to the questions.


Question 1:

The radius of a circle is 1 millimeter. What is the circle's circumference?



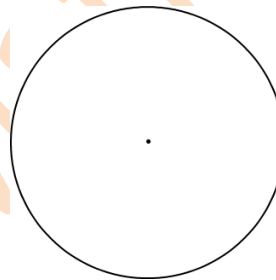
Question 2:

The diameter of a circle is 4 inches. What is the circle's circumference?




Question 3:

The circumference of a circle is 25.12 centimeters. What is the circle's radius?




Question 4:

The radius of a circle is 4 kilometers. What is the circle's diameter?




Question 5:

The circumference of a circle is 31.4 millimeters. What is the circle's radius?



Question 6:

The diameter of a circle is 6 meters. What is the circle's circumference?



Question 7:

The diameter of a circle is 6 centimeters. What is the circle's radius?

