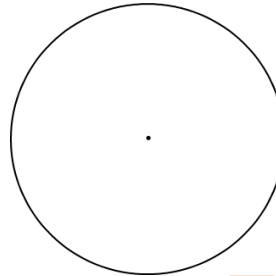


## Circle Area, Perimeter and Circumference

In the blank circle provided, fill in the information you are given – then make your calculations to find the answers to the questions.

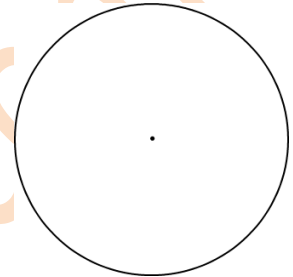
### Question 1:

The circumference of a circle is 25.12 millimeters. What is the circle's diameter?



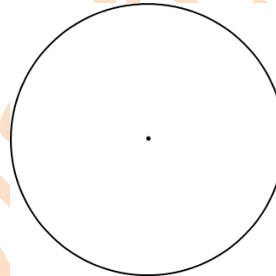
### Question 2:

The circumference of a circle is 12.56 feet. What is the circle's radius?




### Question 3:

The radius of a circle is 2 yards. What is the circle's circumference?




### Question 4:

The diameter of a circle is 4 yards. What is the circle's circumference?




### Question 5:

The circumference of a circle is 25.12 meters. What is the circle's radius?



### Question 6:

The area of a circle is 50.24 square miles. What is the circle's radius?



### Question 7:

The area of a circle is 12.56 square meters. What is the circle's radius?

