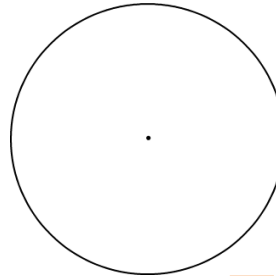


Circle Area, Perimeter and Circumference

In the blank circle provided, fill in the information you are given – then make your calculations to find the answers to the questions.

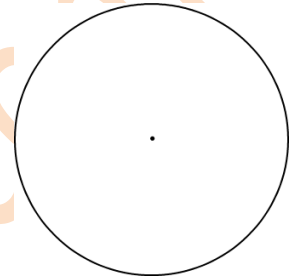
Question 1:

The diameter of a circle is 2 meters. What is the circle's radius?



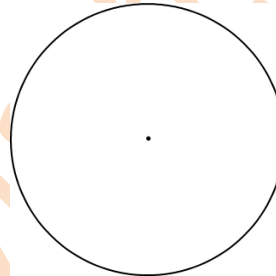
Question 2:

The radius of a circle is 4 inches. What is the circle's circumference?




Question 3:

The diameter of a circle is 2 yards. What is the circle's circumference?




Question 4:

The diameter of a circle is 8 yards. What is the circle's radius?




Question 5:

The diameter of a circle is 8 miles. What is the circle's circumference?



Question 6:

The diameter of a circle is 4 centimeters. What is the circle's circumference?



Question 7:

The area of a circle is 50.24 square kilometers. What is the circle's circumference?

