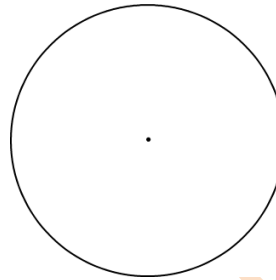


Circle Area, Perimeter and Circumference

In the blank circle provided, fill in the information you are given – then make your calculations to find the answers to the questions.


Question 1:

The diameter of a circle is 6 yards. What is the circle's radius?



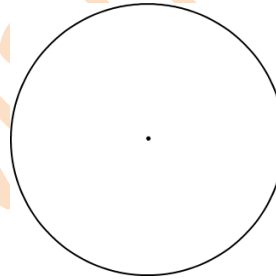
Question 2:

The circumference of a circle is 12.56 millimeters. What is the circle's diameter?




Question 3:

The diameter of a circle is 8 feet. What is the circle's radius?



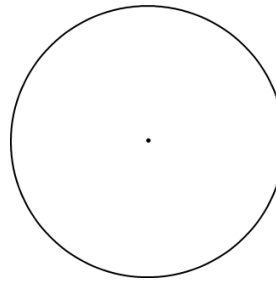
Question 4:

The area of a circle is 28.26 square centimeters. What is the circle's circumference?




Question 5:

The radius of a circle is 4 kilometers. What is the circle's diameter?



Question 6:

The radius of a circle is 4 kilometers. What is the circle's diameter?



Question 7:

The diameter of a circle is 4 feet. What is the circle's circumference?

