



**On the blank circles:**

- 1: Complete the diagram with the given information.**
- 2: Calculate the remaining unknowns.**
- 3: Do not use any value for  $\pi$  – leave in symbol form in your answer for Circumference calculations.**




Radius =  
 Diameter =  
 Circumference =

2 feet




Radius =  
 Diameter =  
 Circumference =

1 mm



Radius =  
 Diameter =  
 Circumference =

15 feet



Radius =  
 Diameter =  
 Circumference =

4 feet