



On the blank circles:

- 1: Complete the diagram with the given information.**
- 2: Calculate the remaining unknowns.**
- 3: Do not use any value for π – leave in symbol form in your answer for Circumference calculations.**




Radius =
 Diameter =
 Circumference =

20mm




Radius =
 Diameter =
 Circumference =

8 yd



Radius =
 Diameter =
 Circumference =

2mi



Radius =
 Diameter =
 Circumference =

1 mi