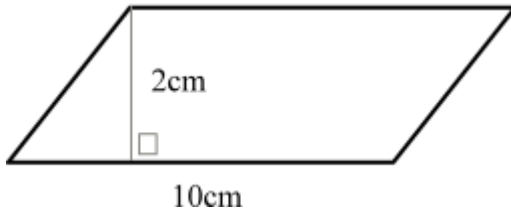
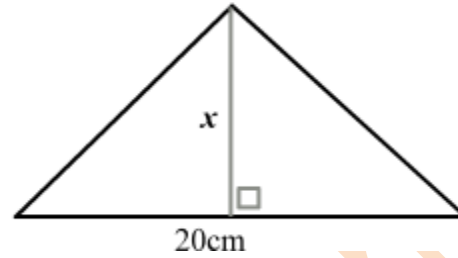


Area Calculations

Calculate the area:

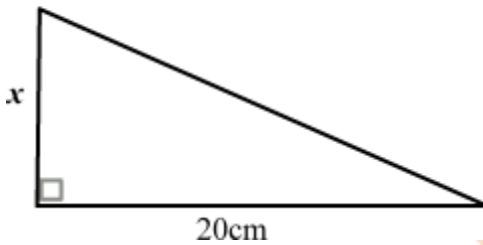


Calculate the length of x .

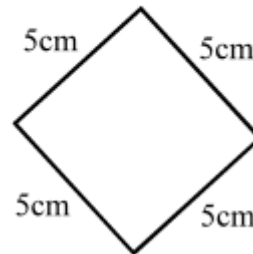


$$\text{Area} = 65\text{cm}^2$$

Calculate the length of x .

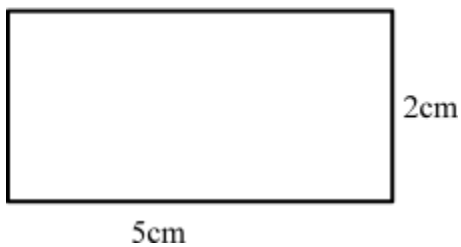


Calculate the area:

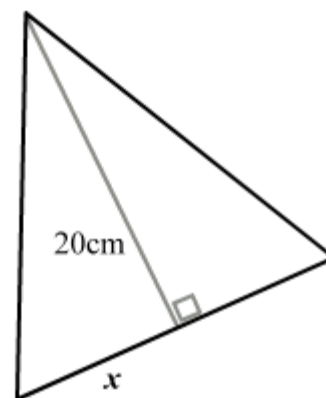


$$\text{Area} = 80\text{cm}^2$$

Calculate the area:



Calculate the length of x .



$$\text{Area} = 150\text{cm}^2$$