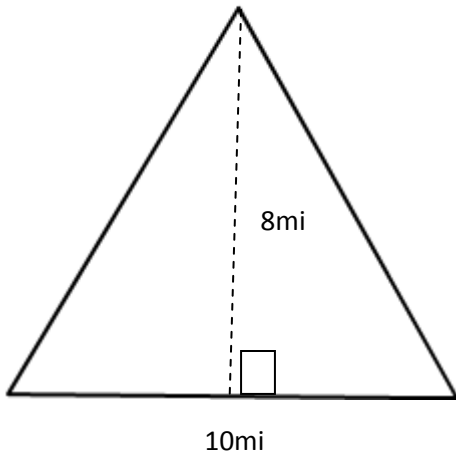


Area Calculations

Calculate the Area.



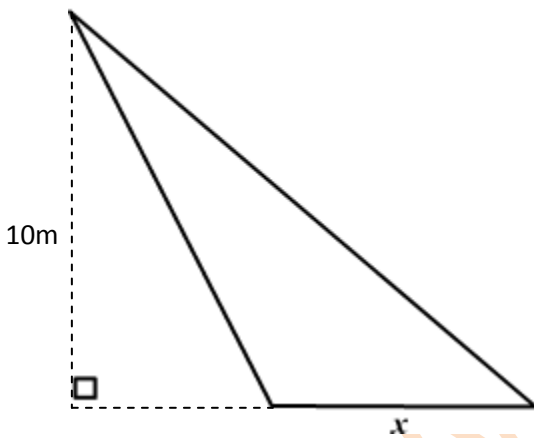
What is the missing length, x?



Calculate the length of x

Area = 8mm^2

Calculate the length of x.



Area = 8mm^2

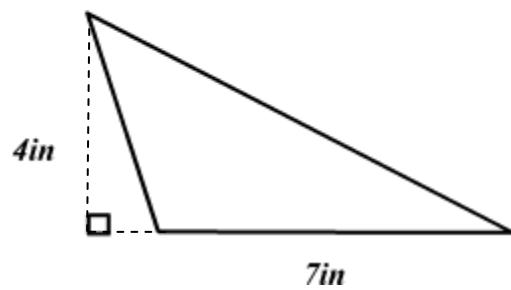
Calculate the length of x.

Area = 50m^2

Calculate the area.



Area = 16mi^2



www.K6Math.com