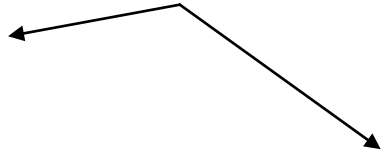


### Angles measure and classify

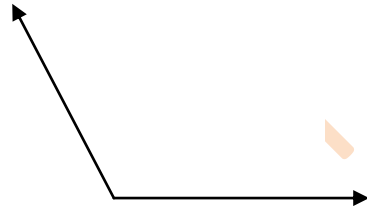
Is this angle acute, right, obtuse, or straight?  
Use your protractor to measure this angle.

- acute
- right
- obtuse
- straight



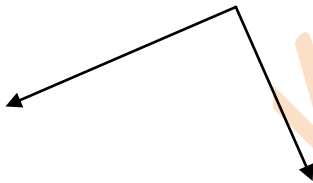
Is this angle acute, right, obtuse, or straight?  
Use your protractor to measure this angle.

- acute
- right
- obtuse
- straight



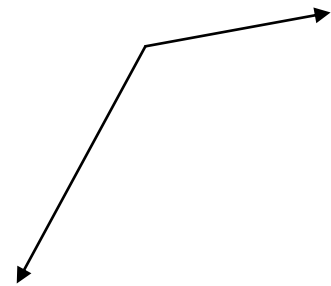
Is this angle acute, right, obtuse, or straight?  
Use your protractor to measure this angle.

- acute
- right
- obtuse
- straight



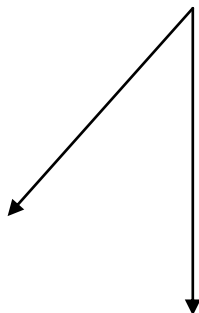
Is this angle acute, right, obtuse, or straight?  
Use your protractor to measure this angle.

- acute
- right
- obtuse
- straight



Is this angle acute, right, obtuse, or straight?  
Use your protractor to measure this angle.

- acute
- right
- obtuse
- straight



Is this angle acute, right, obtuse, or straight?  
Use your protractor to measure this angle.

- acute
- right
- obtuse
- straight

