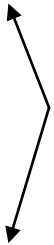


### Estimate then measure the angle. Name the angle.

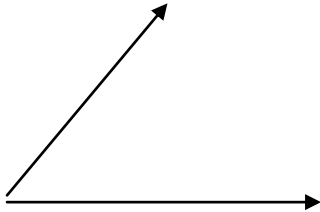
Estimate all angles within  $15^\circ$ . Write your estimate in the box provided.  
When all answers are completed, measure the angle with a protractor.  
Name each angle using letters of your choice and the correct math symbol



Estimate

Name

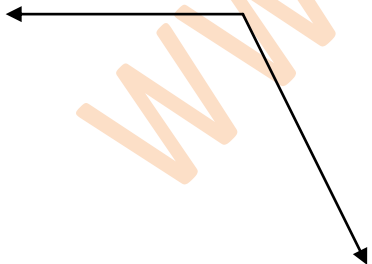
Measurement



Estimate

Name

Measurement



Estimate

Name

Measurement